



- 1) Use the diagram to work out  $15 \times 19$


$\times$	10	5
10		
9		




- 2) Multiply 32 by 5
- 3) What is the perimeter of a rectangle that has length 8 cm and width 3 cm?
- 4) What is the value of 6 in the number 16,412?



- 1) Work out  $24 \times 13$
- 2) A bus carries 46 passengers.  
There are 3 full buses.  
How many passengers in total?
- 3) What is  $150 \div 3$ ?
- 4) What is  $1,500 \div 3$ ?



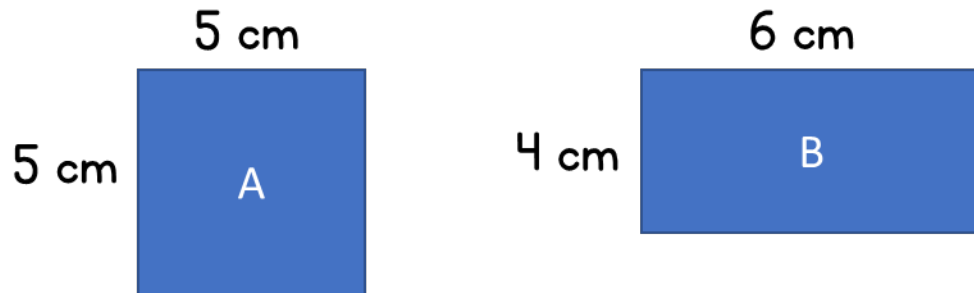
- 1) Multiply 34 by 27
- 2) A book costs £19  
How much do 9 books cost?
- 3) Complete the sentence.  
8 is a factor of .....
- 4) What is  $48 \div 3$ ?



1) Work out  $26^2$


2) What is  $£5 \times 13$ ?

3) Which has the greater area?



4) Put these lengths in ascending order.

350 metres     $\frac{1}{2}$  metre    3 km



1) Calculate  $132 \times 14$

2) Find the area of the rectangle  
23 cm

6 cm



3) Two factors of 14 are 1 and 14  
What are the other 2 factors?

4) What is the next number?

14,300	14,200	14,100	14,000	
--------	--------	--------	--------	--