


1) Use the diagram to work out 15×19

\times	10	5
10		
9		

285



2) Multiply 32 by 5 160

3) What is the perimeter of a rectangle that has length 8 cm and width 3 cm?

22 cm

4) What is the value of 6 in the number 16,412?


6,000

1) Work out 24×13 **312**


2) A bus carries 46 passengers.
There are 3 full buses. **138**
How many passengers in total?

3) What is $150 \div 3$? **50**

4) What is $1,500 \div 3$? **500**



Flashback 4



1) Multiply 34 by 27 918


2) A book costs £19
How much do 9 books cost? £171

3) Complete the sentence.
8 is a factor of e.g 16, 24...

4) What is $48 \div 3$? 16

Flashback 4

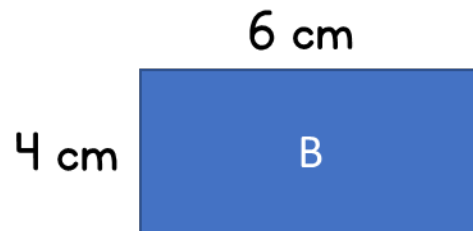
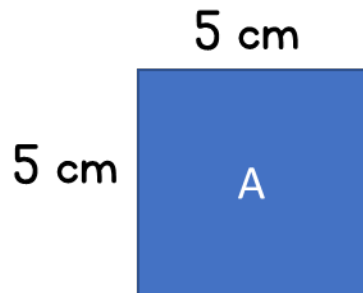
Year 5 | Week 2 | Day 4



1) Work out 26^2 **676**

2) What is $£5 \times 13$? **£65**

3) Which has the greater area?




A

4) Put these lengths in ascending order.

350 metres $\frac{1}{2}$ metre 3 km

$\frac{1}{2}$ metre, 350 metres, 3 km



1) Calculate 132×14 **1,848**

2) Find the area of the rectangle
23 cm



3) Two factors of 14 are 1 and 14
What are the other 2 factors? **2 and 7**

4) What is the next number?

14,300	14,200	14,100	14,000	13,900
--------	--------	--------	--------	---------------